



INDIAN SCHOOL SOHAR
TERM - I EXAM (2018-2019)
CLASS- IV
SUBJECT: EVS
(SET –A)

Date of Exam: 27-09-2018

Time allotted: 2 hours

Max. Marks: 40


(Note: This question paper consists of 2 printed pages. Please check that you have all the pages)

I. Choose the correct answer:- (1/2 × 4 =2)


1. The (incisors/molars) are the teeth which are good for crushing and grinding food.
2. (Weeds/Pulses) are wild, unwanted plants that grow along with the seedlings.
3. The natural surrounding where an animal lives is called its (web/habitat).
4. Today, family values and lifestyle have(not changed/changed).

II. Name the sense organ that works in each of these activities. Then, write one more function of that sense organ. (1 1/2 × 2 =3)

1.

	Smelling a flower
--	-------------------

2.

	Listening to music
---	--------------------

III. Give two examples for the following:- (1 × 3 =3)

1. Aquatic animals
2. Spices
3. Animals which have only internal ears

IV. Fill in the blanks:- (1/2 × 6=3)

1. A ----- is made up of different families.
2. Pointed bristles on hedgehogs and porcupines are called -----.
3. Most adults have a set of ----- permanent teeth.
4. People who are deaf and dumb use ----- language to convey their message.
5. Cultivating bees to produce honey is called bee keeping or -----.
6. Relatives on your mother’s side are called ----- relatives.

V. Give one point of difference between the following:- (2 × 2=4)

1. Fertilizers and pesticides
2. The teeth of herbivorous animals and carnivorous animals


VI. Answer the following with the help of the clues given below:- (1/2 × 4 =2)

1. I am a yellow coloured spice. I am a good healer and add colour to your food.

2. I live on land and in water. I tuck my tail and my head in my warm and cosy shell.
3. I am the sense organ that makes you feel the cool breeze outside.
4. I am a type of family including uncles, aunts and cousins.

VII. Observe the picture and answer the questions given:-

(2× 1=2)



1. Name the animal shown in the picture.
2. What are the ears of this animal used for, besides hearing.
3. What is its body covered with?

VIII. Answer the following in short:-

(2× 6=12)

1. Where do amphibians lay their eggs?
2. How can we create sound family values? (Any two ways)
3. List out two ways of taking care of our sense organs.
4. How does our tongue recognise the taste of the food?
5. Define nocturnal animals and give two examples.
6. How does a snake hear?

IX. Answer the following:-

(2× 3=6)

1. Name the different types of bees that live in a beehive and explain the work they do.
2. Draw, label and explain the parts of a tooth.

X. Complete the flow –chart that shows the journey of food from farm to kitchen.

(1× 3=3)

