



**INDIAN SCHOOL SOHAR**  
**PERIODIC TEST –II (2019 – 20)**  
**SUBJECT: EVS**  
**CLASS- III**

**SET –A**

**Date of Exam: 12. 01. 20**

**Time Allotted: 1 hour**

**Max. Marks: 20**

(Note: This question paper consists of 3 printed pages. Please check that you have all the pages.)

**Name:** \_\_\_\_\_

**Roll No.:** \_\_\_\_\_

**Section:** \_\_\_\_\_

**GR No:** \_\_\_\_\_

**Subject Teacher's Sign with date**

**Invigilator's Sign with date**

**I. Fill in the blanks by choosing correct answer from the help box:**

**( $\frac{1}{2} \times 5 = 2\frac{1}{2}$ )**

**Fruits, rangoli, live, vegetables,  
forest, carbohydrates.**

1. We need shelter to \_\_\_\_\_.
2. \_\_\_\_\_ are excellent sources of roughage.
3. Green colour is used in map to show \_\_\_\_\_.
4. \_\_\_\_\_ is a pattern made with coloured powder in front of main door.
5. Energy giving food contain \_\_\_\_\_

**II. Answer the following questions:**

**Q1. Write any two ways to clean your house.**

**( $\frac{1}{2} \times 2 = 1$ )**

**Q2. Name the four main directions.**

**(1×1=1)**

Q3. Differentiate between Junk food and healthy food. (Any 2 points)

( $\frac{1}{2} \times 4 = 2$ )

Junk Food	Healthy Food
1.	1.
2.	2.

Q4. Why do we need shelter? (Any 2 points)

( $\frac{1}{2} \times 2 = 1$ )

**III. Define the following terms: -**

( $1 \times 3 = 3$ )

1. Maps:-

2. Vegetarians:-

3. Balanced diet:-

**IV. Recognize and name me, who I am?**

( $1 \times 2 = 2$ )

1. I am a spice, yellow in colour, good healer and add colour to your food.

					R		
--	--	--	--	--	---	--	--

2. I am an animal. I give you milk.

		A	
--	--	---	--

**V. Match the following:**

**( $\frac{1}{2} \times 5 = 2\frac{1}{2}$ )**

A	B	Answer
1. Leaf	a. carrot	
2. Cold places	b. houses plastered with mud	
3. Caravan	c. igloo	
4. Root	d. cabbage	
5. Hot area	e. houses on wheels	




**VI. Name the following:**

**( $\frac{1}{2} \times 4 = 2$ )**

1. The map of a room or building - \_\_\_\_\_
2. Areas where poor people live in small houses - \_\_\_\_\_
3. People who do not eat any animal products - \_\_\_\_\_
4. People who move from place to place - \_\_\_\_\_

**VII. Think and answer:**

**( $1 \times 3 = 3$ )**

	<p>*Name the house _____</p> <p>*Place - _____</p>
	<p>*Name the instrument _____</p> <p>*Use - _____</p>
	<p>*Name the type of house _____</p> <p>*Place - _____</p>



**INDIAN SCHOOL SOHAR**  
**PERIODIC TEST –II (2019 – 20)**  
**SUBJECT: EVS**  
**CLASS- III**

**SET - B**

**Date of Exam: 12. 01. 20**

**Time Allotted: 1 hour**

**Max. Marks: 20**

(Note: This question paper consists of 3 printed pages. Please check that you have all the pages.)

**Name:** \_\_\_\_\_

**Roll No.:** \_\_\_\_\_

**Section:** \_\_\_\_\_

**GR No:** \_\_\_\_\_

**Subject Teacher's Sign with date**

**Invigilator's Sign with date**

**I. Recognize and name me, who I am?**

**(1×2=2)**

1. I am a spice, yellow in colour, good healer and add colour to your food.

					R		
--	--	--	--	--	---	--	--

2. I am an animal. I give you milk.

		A	
--	--	---	--

**II. Define the following terms:**

**(1×3=3)**

1. Plan

---

---

2. Non-Vegetarians

---

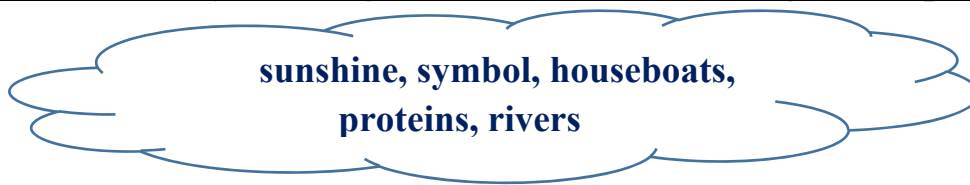
---

3. Balanced diet

---

---

**III. Fill in the blanks by choosing correct answer from the given help box:** ( $\frac{1}{2} \times 5 = 2\frac{1}{2}$ )



1. Small pictures on a map, which represent landform/landmark is a \_\_\_\_\_.
2. Body building food contains \_\_\_\_\_.
3. Blue colour is used in map to show \_\_\_\_\_.
4. Windows must be kept open so that \_\_\_\_\_ can enter into the house.
5. In Kashmir and Kerala, people live in houses that float on water called \_\_\_\_\_.

**IV. Answer the following questions:**

Q1. Differentiate between Junk food and healthy food. (Any 2 points) ( $\frac{1}{2} \times 4 = 2$ )

<b>Junk Food</b>	<b>Healthy Food</b>
1.	1.
2.	2.

Q2. Name the four main directions. ( $1 \times 1 = 1$ )

\_\_\_\_\_

Q3. Write two uses of map. ( $\frac{1}{2} \times 2 = 1$ )

\_\_\_\_\_

\_\_\_\_\_

Q4. Why do we need shelter? (Any 2 points) ( $\frac{1}{2} \times 2 = 1$ )

\_\_\_\_\_

\_\_\_\_\_

\_\_\_\_\_

**V. Name the following:**

( $\frac{1}{2} \times 4 = 2$ )

1. A book of maps - \_\_\_\_\_
2. A hard and strong material used to make tent - \_\_\_\_\_
3. People who move from place to place - \_\_\_\_\_
4. People who do not eat any animal products - \_\_\_\_\_




**VI. Match the following:**

( $\frac{1}{2} \times 5 = 2\frac{1}{2}$ )

A	B	Answer
1. Leaf	a. carrot	
2. Cold places	b. houses plastered with mud	
3. Caravan	c. igloo	
4. Root	d. cabbage	
5. Hot area	e. houses on wheels	

**VII. Think and answer:**

( $1 \times 3 = 3$ )

	<p>*Name the house _____</p> <p>*Place - _____</p>
	<p>*Name the instrument _____</p> <p>*Use - _____</p>
	<p>*Name the type of house _____</p> <p>*Place - _____</p>