



INDIAN SCHOOL SOHAR
TERM –II EXAM (2019 – 20)
SUBJECT: EVS
CLASS- III

SET –A

Date of Exam: 01-03-2020

Time Allotted: 2 hours

Max. Marks: 40

(Note: This question paper consists of 6 printed pages. Please check that you have all the pages.)

Name: _____

Roll No.: _____

Section: _____

GR No: _____

Subject Teacher's Sign with date

Invigilator's Sign with date

I. Fill in the blanks:-

($\frac{1}{2} \times 4 = 2$)

1. The oven in which pots are baked is called _____.
2. The _____ is used to send text and pictures through telephone lines.
3. When we put ice cream in the microwave it will become _____.
4. In some cities, the _____ rail system is used by people to travel locally.

II. Circle the odd one out: -

($\frac{1}{2} \times 4 = 2$)

1. Diarrhea Typhoid Jaundice Tube well
2. Post Card Radio Stamp Inland Letter
3. Air Soil Water Paper
4. Unglazed pottery Potter's Wheel Terracotta Glazed pottery

III. Find out who am I with the help of help box:-

($\frac{1}{2} \times 4 = 2$)

1. I am used to travel short distances by air. _____
2. I am pulled by dogs. _____
3. I am used for travelling underwater. _____
4. I am an environment-friendly mode of transport. _____

Submarine
Cycle
Helicopter
Sledge

IV. Write True or False:-

($\frac{1}{2} \times 3 = 1\frac{1}{2}$)

1. Weavers use kiln in the process of making clothes. _____
2. Space shuttles are used to travel underwater. _____
3. Men wear headgears called turban. _____

V. Name the following:-

($1 \times 4 = 4$)





1. The movement of water on earth in the form of a cycle. _____
2. The train that carries goods. _____
3. The flat round wooden or metal surface that turns like a wheel with the help of electricity or foot pedal. _____
4. An animal that helps to carry timber from the forest. _____

VI. Write the traditional dress worn by women in the following parts of India:-

($1 \times 4 = 4$)


	States	Traditional dress of women
1	Assam	
2	Northern India	
3	Kashmir	
4	Sikkim	

VII. Identify the given pictures and write in the box. Arrange the names of these means of communication under the correct columns. ($\frac{1}{2} \times 8 = 4$)


			


Personal Communication	Mass Communication
1.	1.
2.	2.

VIII. Identify the different states of water from the pictures given below and write in the space provided: - ($\frac{1}{2} \times 3 = 1\frac{1}{2}$)





Cooling





Heating





IX. Give short answers:-

(1 × 3= 3)

1. What is rainwater harvesting?

2. Why are camels used as means of transport in deserts?

3. What is weaving?

X. Answer the following:-

(2× 4= 8)

1. Explain about the two main means of communication.

2. What factors determine what people wear? (Any 2 points)

3. Why do we travel? (Any 4 points)

4. Differentiate between air transport and water transport? (Any 2 points)

Air Transport	Water Transport
1.	1.
2.	2.

XI. Answer in detail:-

(3 × 2= 6)

1. How do animals communicate? (Any 3 points)

2. What is soil? Write any two uses of soil.

XII. Arrange the steps in water cycle and write it in correct order in the space given below:-

($\frac{1}{2} \times 4 = 2$)

1. The water rises up in the form of water vapour.
2. The sun heats up the water.
3. The water vapour then changes into clouds.
4. From the clouds water again comes down in the form of rain.

1. _____

2. _____

3. _____

4. _____



INDIAN SCHOOL SOHAR
TERM –II EXAM (2019 – 20)
SUBJECT: EVS
CLASS- III

SET –B

Date of Exam: 01-03-2020

Time Allotted: 2 hours

Max. Marks: 40

(Note: This question paper consists of 6 printed pages. Please check that you have all the pages.)

Name: _____

Roll No.: _____

Section: _____





GR No: _____

Subject Teacher's Sign with date

Invigilator's Sign with date

I. Identify the given pictures and write in the box. Arrange the names of these means of communication under the correct columns.

($\frac{1}{2} \times 8 = 4$)

			
_____ _____ _____	_____ _____ _____	_____ _____ _____	_____ _____ _____

Personal Communication	Mass Communication
1.	1.
2.	2.

II. Write the steps in water cycle in correct order in the space given below :-

($\frac{1}{2} \times 4 = 2$)

1. The water rises up in the form of water vapour.
2. The water vapour then changes into clouds.
3. The sun heats up the water.
4. From the clouds water again comes down in the form of rain.

1. _____

2. _____

3. _____

4. _____

III. Write True or False:-

($\frac{1}{2} \times 3 = 1\frac{1}{2}$)

1. Men wear headgears called turbans. _____
2. Space shuttles are used to travel underwater. _____
3. Weavers use kiln in the process of making clothes. _____

IV. Fill in the blanks:-

($\frac{1}{2} \times 4 = 2$)

1. The wool is woven with _____ from sheep.
2. The _____ is used to send letters to another country.
3. When we put milk in the freezer of the refrigerator, it will become _____.
4. In some cities, the _____ rail system is used by people to travel locally.

V. Find out who am I with the help of help box:-

($\frac{1}{2} \times 4 = 2$)

1. I am used in villages as a means of transport. _____
2. I am pulled by dogs. _____
3. I am used for travelling underwater. _____
4. I am used to travel short distances by air. _____

Submarine

Bullock Carts

Helicopter

Sledge

VI. Name the following:-

($1 \times 4 = 4$)

1. The movement of water on earth in the form of a cycle. _____
2. An animal that helps to carry timber from forest. _____
3. The flat round wooden or metal surface that turns like a wheel with the help of electricity or foot pedal. _____
4. The train that carries goods. _____

VII. Answer the following:-

($2 \times 4 = 8$)

1. How do animals communicate? (Any 4 points)

2. How are pots made?

3. Why do we travel? (Any 4 points)

4. Differentiate between air transport and water transport? (Any 2 points)

Air Transport	Water Transport
1.	1.
2.	2.

VIII. Answer in detail:-

(3 × 2= 6)

1. What is communication? Explain about the two main means of communication.

2. Write some ways to save water. (Any 3 points)

IX. Give short answers:-

(1 × 3= 3)

1. What is pottery?

2. Why are helicopters used in mountains and thick jungle?

3. What is air pollution?


X. Write the traditional dress worn by women in the following parts of India:-

(1 × 4 = 4)

	States	Traditional dress of women
1	Northern India	
2	Assam	
3	Sikkim	
4	Kashmir	

XI. Identify the different states of water from the pictures given below and write in the space provided: -

($\frac{1}{2} \times 3 = 1\frac{1}{2}$)



XII. Circle the odd one out: -

($\frac{1}{2} \times 4 = 2$)

- | | | | |
|---------------------|------------|---------|----------------|
| 1. River | Mountain | Pond | Ocean |
| 2. Unglazed pottery | Terracotta | Weaving | Glazed pottery |
| 3. Post Card | Television | Stamp | Inland Letter |
| 4. Air | Soil | Water | Pen |