

4. Select the INCORRECT statement about mammals.

Statement 1 – Mammals give birth to young ones.

Statement 2 – Mammals lay eggs.

Statement 3 – Mammals feed their young ones with mother’s milk.

Statement 4 – Mother’s milk of mammals protects young ones from infections and diseases.

a) Statement- 1

b) Statement -4

c) Statement -2

d) Statement -3

4.Answer: ____

5. I am an internal organ. I belong to digestive system. I produce juices that break the in-taken food into smaller pieces. Find it out who I am.

a) Heart

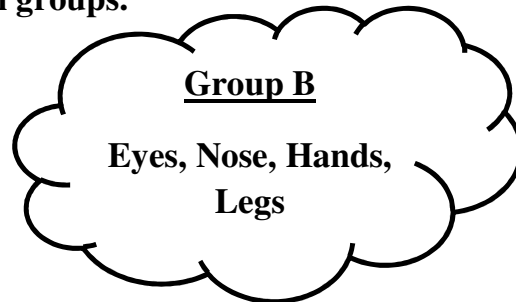
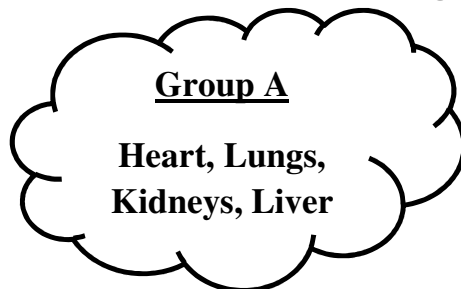
b) Nose

c) Stomach

d) Lungs

5.Answer: ____

6. Pick the correct titles for the given groups.



a) Group A- External Organs
Group B – Internal Organs

b) Group A – Sense Organs
Group B – Internal Organs

c) Group A – External Organs
Group B – Organ systems

d) Group A – Internal Organs
Group B – External Organs

6.Answer:

7. Identify the organ from the given clues.

1. It is the largest gland in our body.

2. It performs more than 500 functions.

a) Liver

b) Stomach

c) Saliva

d) Lungs

7.Answer: ____

8. Which of the following animals' eggs hatch and small tadpoles come out?

- a) Fish
- b) Turtles
- c) Cockroaches
- d) Frogs

8. Answer: ____

II Answer the following questions:

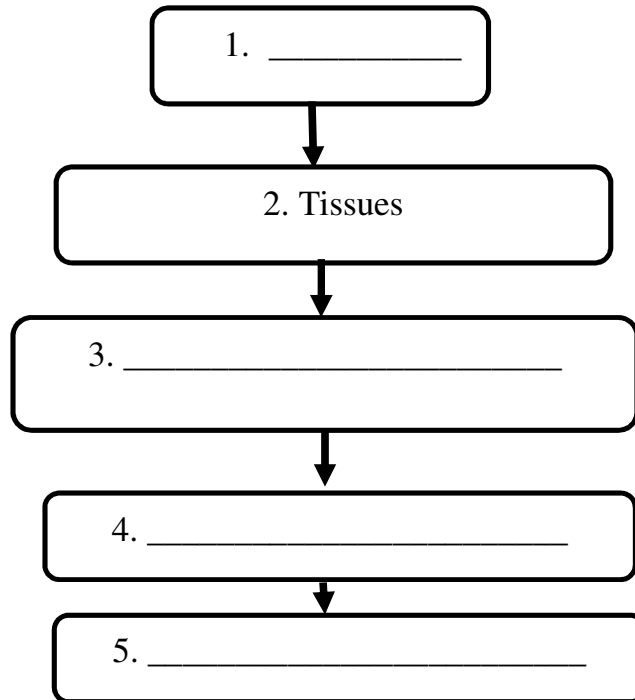
(2 × 3 = 6 marks)

Q1. What is reproduction?

(2 marks)

Q2. A flow chart that shows the structure of our human body is given below. Fill out the missing things in the flow chart.

(1/2 × 4 = 2 marks)



Q3. What is an orphanage?

(2 marks)

III Answer in detail:

(3 × 2 = 6 marks)

1. Read the given passage about Dev and answer the given questions:

Dev lost his parents Mr Suraj and Ms Radha in an accident when he was eight years old. Later Mr Balu and Ms Leela met Dev in an orphanage. They liked him very much. They took permission from the court and then they became his legal parents. They brought him to their house. Dev lives happily with his legal parents.

Q1. Who are Dev’s adopted parents? (Write their names) (1 mark)

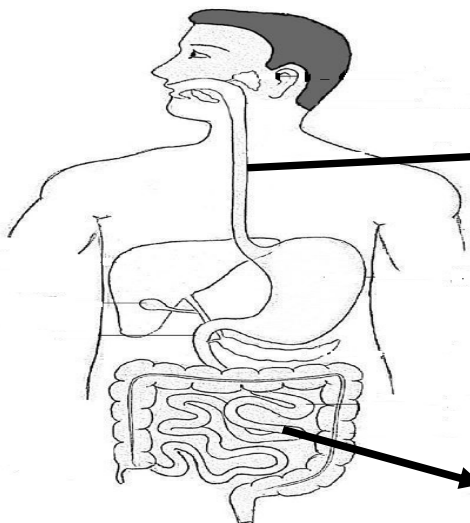
Q2 Write any one difference between foster care and adoption. (2 marks)

| Foster care | Adoption |
|-------------|----------|
| _____ | _____ |
| _____ | _____ |
| _____ | _____ |
| _____ | _____ |
| _____ | _____ |
| _____ | _____ |

2. Name the parts ‘A’ and ‘B’ of the diagram given below and write their functions:

(1½ × 2 = 3 marks)

Human digestive system



(i) Name: _____
(ii) Function:

(i) Name: _____
(ii) Function:

