



INDIAN SCHOOL SOHAR
TERM –I EXAM (2022 – 23)
SUBJECT: EVS
CLASS- III
SET –A

Date of Exam: 25-09-2022

Time Allotted: 2 hours

Max. Marks: 40

(Note: This question paper consists of 6 printed pages. Please check that you have all the pages.)

Name: _____

Roll No.: _____

Section: _____

GR No: _____

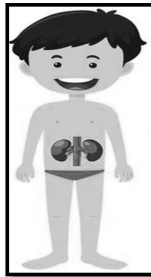
Subject Teacher's Sign with date

Invigilator's Sign with date

I. Choose and write the correct option in the given space:

(1 x 10=10)

1. Look at the picture and name the internal organ of his body.



1. Answer: _____

a. Brain

c. Heart

b. Lungs

d. Kidneys

2. In the given picture, name the sense organ used by the cat.



2. Answer: _____

a. Eyes

c. Ears

b. Nose

d. Skin

3. I climb up taking the support of walls and other plants. Who am I?

- a. a herb
- b. a creeper
- c. a climber
- d. a shrub

3. Answer: _____

4. Identify the plant that is a creeper.

- a. Grape
- b. Hibiscus
- c. Pumpkin
- d. Tulsi

4. Answer: _____

5. Complete the following

Wings: fly :: Fins: _____

- a. run
- b. swim
- c. walk
- d. jump

5. Answer: _____


6. Four children made the following sentences about food provided by the plants. Whose sentence is **TRUE**?

- a. Meena: Carrot and raddish are roots of the plant.
- b. Priya: Tea is made from dried stem.
- c. Ashok: Potato and cabbage grow under the ground.
- d. Raj: Rice and wheat are the leaves we eat.

6. Answer: _____

Read the passage and answer the questions that follow:

Ramu went for shopping with his father. On the way they saw a visually challenged person who was trying to cross the road. Ramu's father went to him and asked, "May I help you sir?" and the differently abled person replied, "Yes, I want to cross the road". Ramu's father joyfully helped him to cross the road.



7. Visually challenged person is a person who cannot _____.

- a. talk
- b. hear
- c. see
- d. move

7. Answer: _____

8. Select the **INCORRECT** match out of the following.

- a. Sign language – to communicate c. Braille- for reading
b. Hearing aid- to see d. Ramps- for the movement of wheelchair

8. Answer: __ _

9. How should we treat differently abled people?

- a. Showing sympathy towards them c. Treat them unequally
b. Do not respect them d. Be supportive to them

9. Answer: _____

10. Write **True** or **False** for the following sentences:-

- a. Differently abled people also have talents and understanding- True
b. Our sense organs work with the help of the brain- True

II. Answer the following in one or two sentences:-

(2 x 6=12)

1. a. Write any one use of plants.

b. Give one difference between Cactus and Pine.

S.No.	Cactus	Pine
1.		

2. Fill in the blanks using the correct body parts given in the bracket.

(ears, skin, hands, eyes, nose)

a. The smell of rotten eggs reached their _____.

b. She washed her _____ before eating.

3. Leaves are called the '**Food Factories**' of plants because

4. Give two differences between internal organs and external organs.

S.No.	Internal Organs	External Organs
1.		
2.		

5. How do our eyes help us to see?

6. Complete the table.

Name of the leaves	Size	Use of the leaf (any one)
1. Tulsi	Small	_____
2. _____	Big	Plate to serve food

III. Answer the following:-

(3 x 6 = 18)


1. Give one word for the following:-

a. Pores through which leaves breathe || _____

b. A plant which is not green in colour and does not make its own food - _____

c. Green coloured pigment in leaves _____

2. Draw and label a diagram to show the process of photosynthesis.



3. From the given diagram,

a. **Label** the organ in the diagram that **helps to digest food**.

b. **Rearrange** the process of digestion using numbers (1, 2, 3, 4).

Digestion takes place

Teeth chew the food

Food enters the stomach

Food enters the mouth



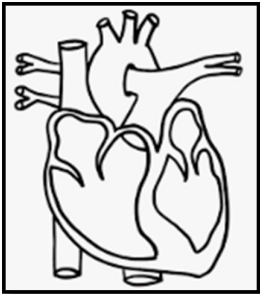
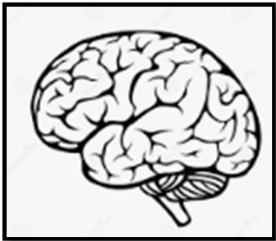
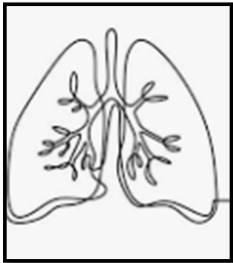
4. How do we use these body parts?

1. **Legs** _____

2. **Feet** _____

3. Arms _____

5. Name the organ and write any one function of each.

S.No.		Name the organ	Function of the organ
1.			
2.			
3.			

6. Give one example of food that we get from the parts of a plant.

a. Fruits _____

b. Roots _____

c. Leaves _____

***** THE END*****